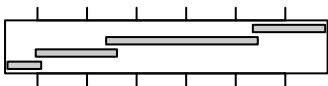
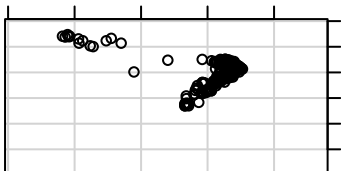


Given : depth

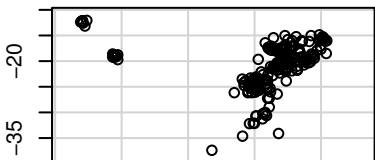
100 300 500



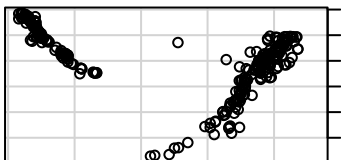
165 170 175 180 185



-20  
-35



-20  
-35



-20  
-35

lat

long